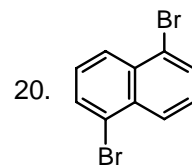
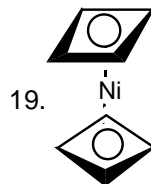
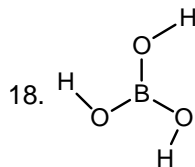
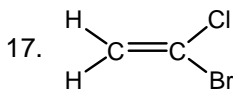
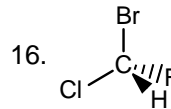
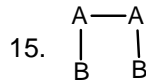
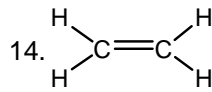
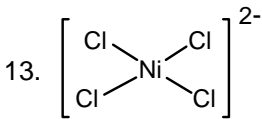
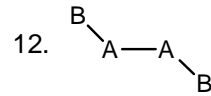
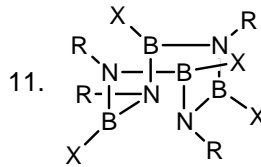
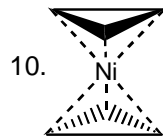
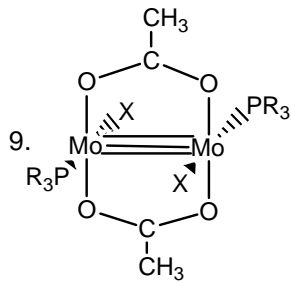
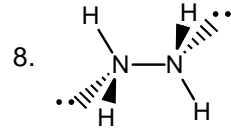
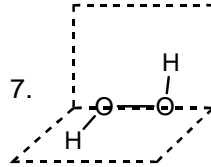
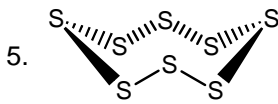
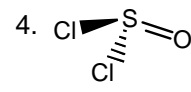
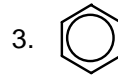
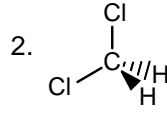
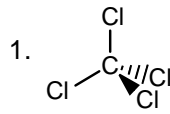


CLASIFICA LAS SIGUIENTES MOLÉCULAS EN GRUPOS PUNTALES



Soluciones:

- |                    |                     |                     |                     |
|--------------------|---------------------|---------------------|---------------------|
| 1. Td              | 6. Oh               | 11. S <sub>4</sub>  | 16. C <sub>1</sub>  |
| 2. C <sub>2v</sub> | 7. C <sub>2</sub>   | 12. C <sub>2h</sub> | 17. C <sub>s</sub>  |
| 3. D <sub>6h</sub> | 8. C <sub>2</sub>   | 13. D <sub>4h</sub> | 18. C <sub>3h</sub> |
| 4. C <sub>s</sub>  | 9. C <sub>2h</sub>  | 14. D <sub>2h</sub> | 19. D <sub>4d</sub> |
| 5. D <sub>4d</sub> | 10. D <sub>3d</sub> | 15. C <sub>2v</sub> | 20. C <sub>2h</sub> |